

3/4 Ironbark – Homework: Term 1, Week 3

Each night – tick when complete	Monday	Tuesday	Wednesday	Thursday
<input type="checkbox"/> Spelling – Look, cover, say, write, check				
<input type="checkbox"/> Maths facts – quiz yourself, out of order if you can!				
<input type="checkbox"/> Read – pick something to read for about 20 minutes				

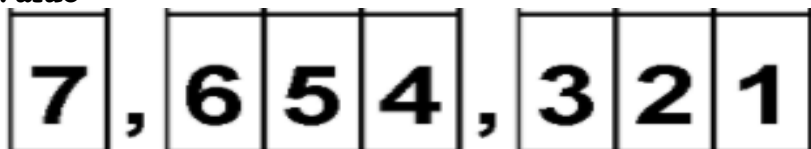
OPTIONAL: Each week, you can choose to complete one or two activities from the 'Optional Enrichment Activities' list. Visit the class blog website at <http://clevercookies.edublogs.org> for more activities and ideas.

Proof Reading: How many mistakes can you find and fix?

Anthony Visits Nick

On sunday, Anthony went over to Nicks house to play basketball. They played a gam of one-on-one. Anthony made six baskets, bute nick made eight Nick was the winner. After the game, both boys whent in side to have some


Place Value



- Color the digit in the Hundreds Place Blue.
- Color the digit in the Ten Thousands Place Orange.
- Color the digit in the Millions Place Purple.
- Color the digit in the Tens Place Green.
- Color the digit in the Ones Place Red.
- Color the digit in the Thousands Place Grey.
- Color the digit in the Hundred Thousands Place Yellow.

Mindfulness: Relax and focus on the moment. Repeat until you feel calm and still.

1 Smile <input type="checkbox"/>	 Breathe In <input type="checkbox"/>	 Breathe Out <input type="checkbox"/>	 Count The Lines On Your Hand _____
2 Smile <input type="checkbox"/>	 Breathe In <input type="checkbox"/>	 Breathe Out <input type="checkbox"/>	 Count The Curves On Your Ears _____
3 Smile <input type="checkbox"/>	 Breathe In <input type="checkbox"/>	 Breathe Out <input type="checkbox"/>	 Count The Bumps On Your Lips _____



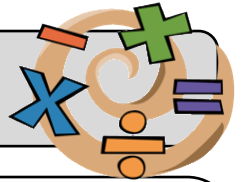
Spelling

	ank
YEAR 3 – RULE WORDS	thank
	bank
	sank
	tank
	blank
	drank
	plank
	plank
	stank
	crank
YEAR 4 – RULE WORDS	our
	four
	your
	court
	armour
	source
	course
	courtesy
	pour
	tour
PERSONAL	

Maths Facts

X	÷
11 X 1 = 11	11 ÷ 11 = 1
11 X 2 = 22	22 ÷ 11 = 2
11 X 3 = 33	33 ÷ 11 = 3
11 X 4 = 44	44 ÷ 11 = 4
11 X 5 = 55	55 ÷ 11 = 5
11 X 6 = 66	66 ÷ 11 = 6
11 X 7 = 77	77 ÷ 11 = 7
11 X 8 = 88	88 ÷ 11 = 8
11 X 9 = 99	99 ÷ 11 = 9
11 X 10 = 110	110 ÷ 11 = 10
11 X 11 = 121	121 ÷ 11 = 11
11 X 12 = 132	132 ÷ 11 = 12

Mathematical Problem Solving (Week 3)



At Friday's assembly, 2 people in every class got a Principal's award, 2 people in every class got a book award. There are 7 classes. How many awards were given altogether?

OR

Ms Salmon's rabbits each eat $\frac{1}{2}$ cup of pellets and $\frac{1}{2}$ cup of vegetables every day. Her chickens eat 2 cups of vegetables and 1 cup of pellets a day. How much food will Ms Salmon need to feed her pets in one week?

Draw a diagram

(visualise and plan)

Number sentence

(what will you solve)

Working out

(prove your thinking)

Answer in words